

Maths

To recognise, read and write numbers to 100.

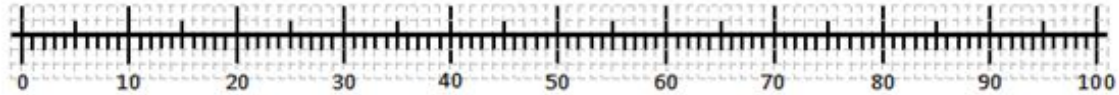
Mrs
Bramble



Independent Task

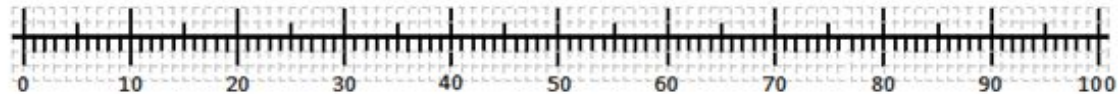
Task 1

Count the number of objects in tens then ones. Show it in Dienes. Show it in jumps on the number line. Write the numeral.



There are bricks in total.

Count in tens then
count on in ones!



There are bricks in total.



Independent Task

Match the image to the word.


Task 2

fifty eight

thirty eight

forty eight

sixty eight



eighty two

eighty three

eighty one

eighty four

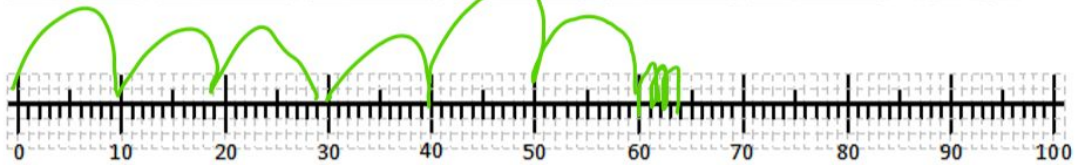


Answers

Task 1

Count the number of objects in tens then ones. Show it in Dienes. Show it in jumps on the number line. Write the numeral.

1.

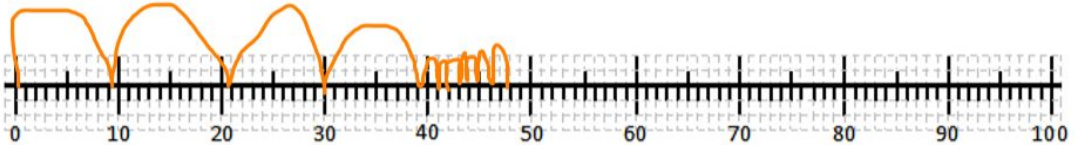
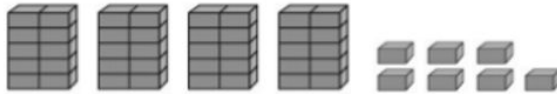


There are 64 bricks in total.

Count in tens then
count on in ones!



2.



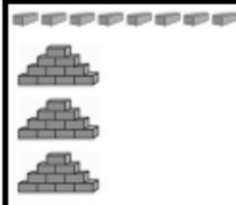







There are 47 bricks in total.



Answers

Task 2

Match the image to the word.

fifty eight	thirty eight	forty eight	sixty eight
			
			
eighty two	eighty three	eighty one	eighty four

Connections: 'fifty eight' is connected to the first base ten block (58). 'thirty eight' is connected to the second base ten block (38). 'forty eight' is connected to the third base ten block (48). 'sixty eight' is connected to the fourth base ten block (68). 'eighty two' is connected to the first base ten block (82). 'eighty three' is connected to the second base ten block (83). 'eighty one' is connected to the third base ten block (81). 'eighty four' is connected to the fourth base ten block (84).

