

Mathematics


Lesson 8 of 10

Numbers Within 10: Placing Numbers Within Ten in Order

Miss. Molnar



Can you choose 3 fish bowls and order them from fewest to most? Most to fewest?

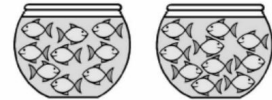

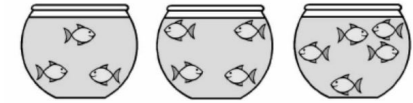
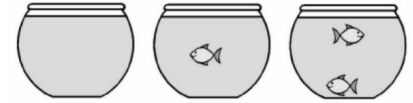




fewest

most

most

fewest





fewest
most



most
fewest



