

Applying Knowledge of Time to Solve Problems Worksheet

Mathematics

Mrs Behan



Independent task

Have a go at solving some more of Mr Slade's problems.

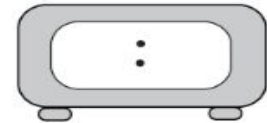
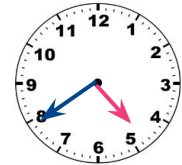
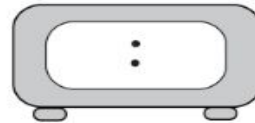
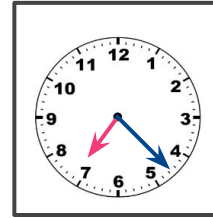
The group took a guided tour around Buckingham Palace.

The tour started at 03:20pm and finished at 04:05pm.

How long was the tour?

The group see a poster for the musical Matilda. It starts at 07.30pm and finishes at 10:15pm. How long does the show last?

The headteacher wanted to know what time the group would leave and return from the trip. Show these times on a digital clock. Remember a.m and p.m.



It had been 45 minutes since Big Ben had chimed twice. What time was it?

