

Maths

Adding directed numbers

Mr Lund

1



Adding directed numbers

1. Complete the calculations.

a) $-3 + 9$

b) $9 + -3$

c) $-3 + -9$

d) $-9 + -3$

e) $-6 + -3$

f) $8 + -12$

g) $-7 + 2$

2. Fill in the blanks.

a) $-5 + \square = 4$

b) $\square + -3 = 12$

c) $-3 + \square = -10$

d) $9 + \square = 9$

e) $\square + 9 = 0$

f) $9 + \square = 4$

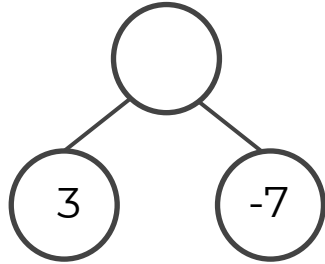
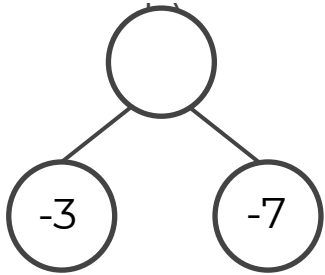
g) $\square + 9 = 6$



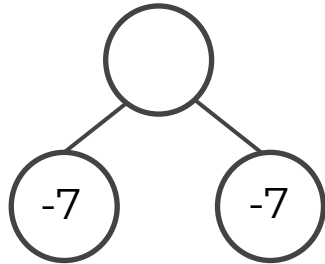
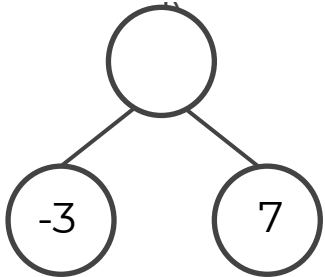
Adding directed numbers

3. Complete the part whole models.

a)



c)



4. Work out the missing numbers in these statements.

a) $-6 + -4 = 4 + \square$

b) $10 + \square = -4 + 9$

c) $0 + -7 = 10 + \square$

5. Simplify the expressions by collecting like terms.

a) $4g + -2g$

b) $-5t + 14t$

c) $9 + 7d + -5 + -d$



Answers



Adding directed numbers

1. Complete the calculations.

a) $-3 + 9 = 6$

b) $9 + -3 = 6$

c) $-3 + -9 = -12$

d) $-9 + -3 = -12$

e) $-6 + -3 = -9$

f) $8 + -12 = -4$

g) $-7 + 2 = -5$

2. Fill in the blanks.

a) $-5 + 9 = 4$

b) $15 + -3 = 12$

c) $-3 + -7 = -10$

d) $9 + 0 = 9$

e) $-9 + 9 = 0$

f) $9 + -5 = 4$

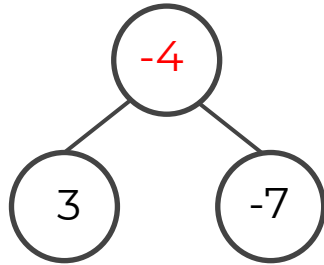
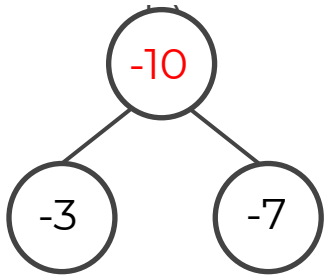
g) $-3 + 9 = 6$



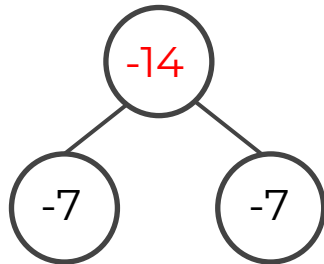
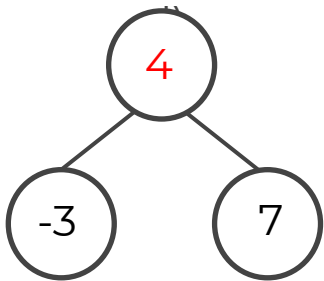
Adding directed numbers

3. Complete the part whole models.

a)



c)



4. Work out the missing numbers in these statements.

a) $-6 + -4 = 4 + -14$

b) $10 + -5 = -4 + 9$

c) $0 + -7 = 10 + -17$

5. Simplify the expressions by collecting like terms.

a) $4g + -2g = 2g$

b) $-5t + 14t = 9t$

c) $9 + 7d + -5 + -d = 6d + 4$

