

Mathematics Independent Task

Grouping and sharing **Exploring counting in groups of five**

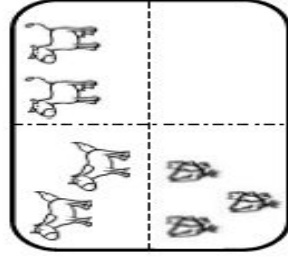
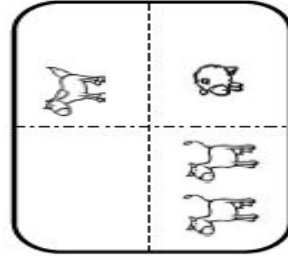
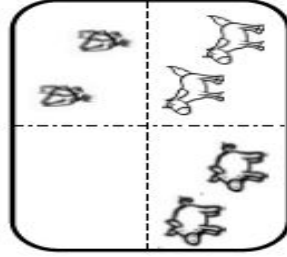
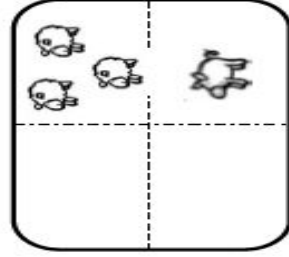
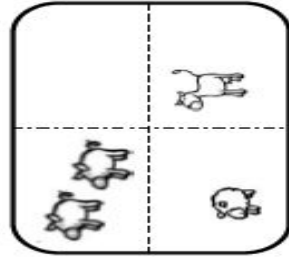
Mrs Khaira



Activity 1

Help Farmer MacDonald to put his 25 animals in the correct fields.

There must be 5 animals in each field.



Activity 2



Five rounded rectangular boxes arranged horizontally. Each box is divided into four quadrants by dashed lines, one vertical and one horizontal, meeting at the center. The boxes are empty and intended for writing or drawing.

