

Mathematics

Time

Calculating duration of time in minutes

Independent Task

Miss Sabzvari






Independent Task

-**Fill** in the missing values on the race table.

-Use your clocks to **calculate** the answers.

-**Draw** the minute and hour hands on the clocks.

Runner	Start time	Duration	End time
Lisa		Twenty to eight	20 minutes
Becky		20 minutes	Five past eight
James		Twenty past four	Five to five

