

Maths

Shapes:

To describe the properties of 3-D shapes


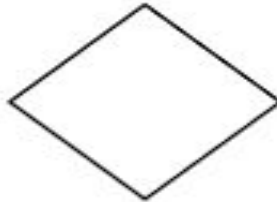
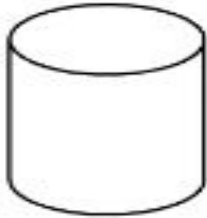
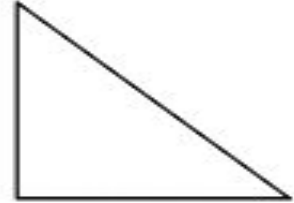
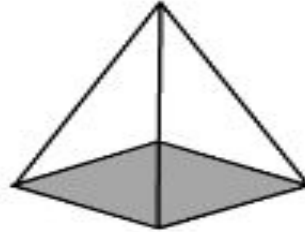
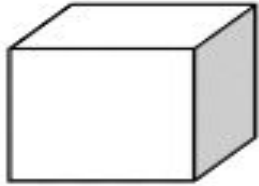
Independent Activity

Miss Brinkworth



Part A

- 1) Which of these show 3-D shapes?
- 2) Name the 3-D shapes you can see



Challenge - Which 3-D shapes we have looked at today are missing?



Part B - match the description to the 3-D shape and name it

| | | | | |
|--|---|---|--|--|
| <p>This shape has five faces. It has eight edges and five vertices.</p> | • | • | | |
| <p>This shape has eight vertices, six square faces and twelve edges.</p> | • | • | | |
| <p>This shape has three pairs of parallel rectangular faces.</p> | • | • | | |

