

Simple direct proportion $y = kx$

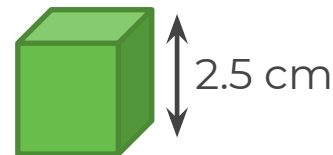


Simple direct proportion $y = kx$

1. A burger costs £3
 - a) How much do 2 burgers cost?
 - b) How much do 5 burgers cost?
 - c) How much do 7 burgers cost?
 - d) Ina spends £12 on some burgers.
How many does she buy?
 - e) How much do x burgers cost?

2. Cubes are stacked to make towers.

Each cube is 2.5 cm tall.



- a) Complete the table

Number of cubes	2	4	5	11	
Height of tower (cm)					50

- b) Explain why this shows a direct proportion relationship.



Simple direct proportion $y = kx$

3. Y is directly proportional to X

Given Y is 20 when $X = 4$

- a) Find a formula connecting X and Y
- b) Find the value of Y when $X = 7$
- c) Find the value of X when $Y = 30$
- d) Sketch a graph to show the relationship between X and Y

4. The time, t, it takes to print a book is directly proportional to the number of pages, P, in the book.

A book with 200 pages takes 10 minutes.

- a) How long does it take to print a book with 360 pages?
- b) It takes 7.5 minutes to print another book. How many pages does the book have?



Answers



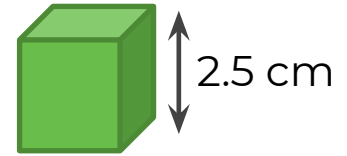
Simple direct proportion $y = kx$

1. A burger costs £3

- a) How much do 2 burgers cost? £6
- b) How much do 5 burgers cost? £15
- c) How much do 7 burgers cost? £21
- d) Ina spends £12 on some burgers.
How many does she buy? 4
- e) How much do x burgers cost? $3x$

2. Cubes are stacked to make towers.

Each cube is 2.5 cm tall.



a) Complete the table

Number of cubes	2	4	5	11	20
Height of tower (cm)	5	10	12.5	27.5	50

b) Explain why this shows a direct proportion relationship.

It is of the form $y = kx$ where $k = 2.5$
Every time a cube is added, the height is increased by 2.5



Simple direct proportion $y = kx$

3. Y is directly proportional to X

Given Y is 20 when X = 4

a) Find a formula connecting X and Y

$$Y = 5X$$

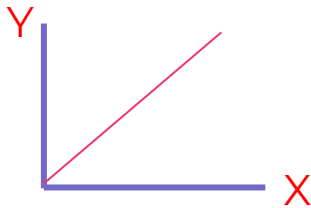
b) Find the value of Y when X = 7

$$Y = 35$$

c) Find the value of X when Y = 30

$$X = 6$$

d) Sketch a graph to show the relationship between X and Y



4. The time, t , it takes to print a book is directly proportional to the number of pages, P , in the book.

A book with 200 pages takes 10 minutes.

a) How long does it take to print a book with 360 pages? $t = 0.05P$

$$t = 18 \text{ minutes}$$

b) It takes 7.5 minutes to print another book. How many pages does the book have?

$$P = 150 \text{ pages}$$

