

Mathematics
Lesson 4 of 15

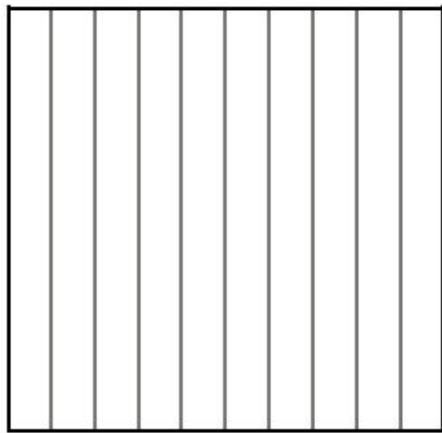
Unit 6: Fractions and Decimals

Tenths and hundredths

Independent Task

Mr Whitehead






I have coloured half of the shape _____

I have coloured one fifth of the shape _____

I have coloured one tenth of the shape _____



of the shape has been left blank.



I have coloured one quarter of the shape _____

I have coloured two fifths of the shape _____


I have coloured one tenth of the shape _____

I have coloured one twentieth of the shape _____



of the shape has been left blank.

Ready for a challenge?



YOU CHOOSE:

Ask a parent/carer to help you draw the grids (use a ruler).

