

Mathematics




Identifying how patterns have been created through rotation


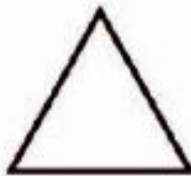
Independent Task

Miss Mitchell



Question 1









Question 1

