

Mathematics


Identifying quarter past on an analogue clock

Miss Sabzvari




Independent Task


- Draw the hands on the clocks for the times shown



Quarter past three



Quarter past two



Quarter past one

