

Maths

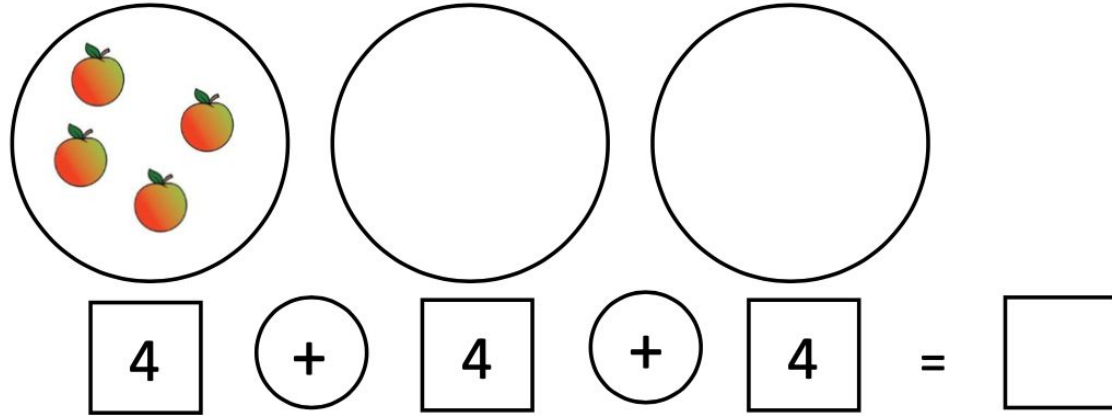
# To add equal groups

Miss Charlton, Mrs Bramble and Miss Sidhu



# Independent Task

Apples come in bags of four. Goldilocks buys three bags of apples. How many apples does she have in total?

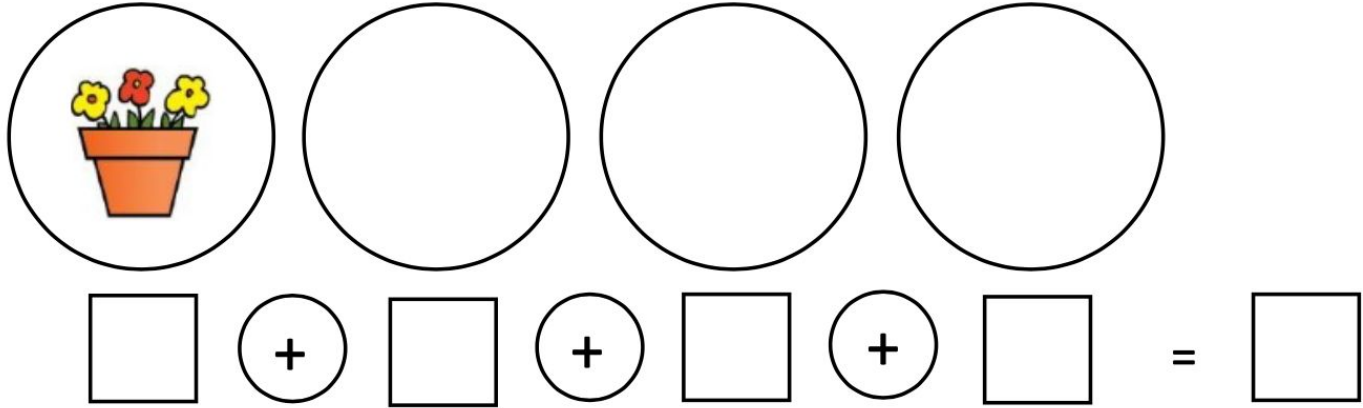


The diagram illustrates the problem with three circles representing bags. The first circle contains four apples, while the other two are empty. Below the circles is an addition equation: a square containing the number 4, followed by a circle containing a plus sign, another square containing 4, a second circle with a plus sign, a third square containing 4, an equals sign, and a final empty square for the answer.

$$4 + 4 + 4 = \square$$



# Independent Task

There are three flowers in each pot. How many flowers are there altogether in four pots?



# Answers


Apples come in bags of four. Goldilocks buys three bags of apples. How many apples does she have in total?


$$\boxed{4} + \boxed{4} + \boxed{4} = \boxed{12}$$



# Answers

There are three flowers in each pot. How many flowers are there altogether in four pots?


$$\boxed{3} \text{ } \textcircled{+} \text{ } \boxed{3} \text{ } \textcircled{+} \text{ } \boxed{3} \text{ } \textcircled{+} \text{ } \boxed{3} \text{ } = \text{ } \boxed{12}$$

